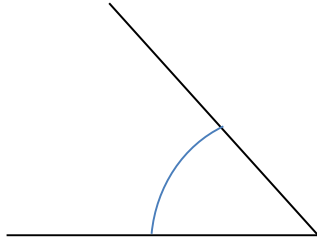
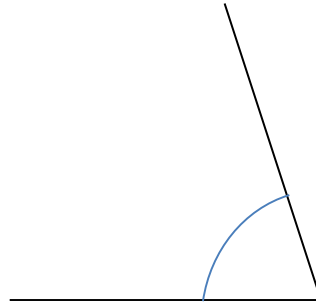


Winkel 1

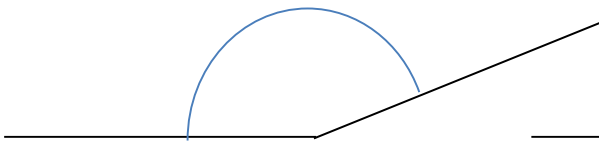
Miss die Winkel und gib ihre Art an (Lösung)



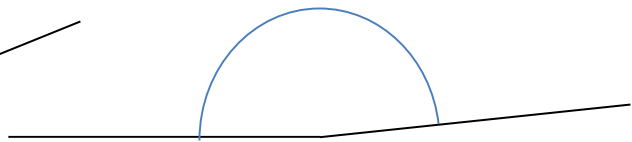
spitzer Winkel: 48°



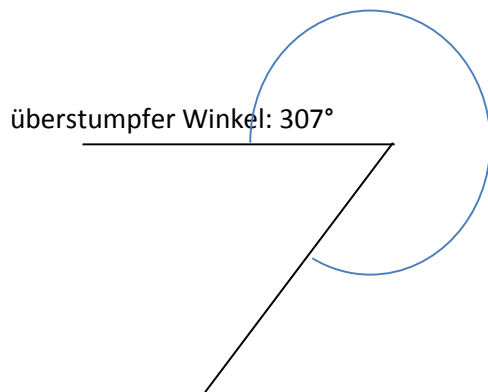
spitzer Winkel: 72°



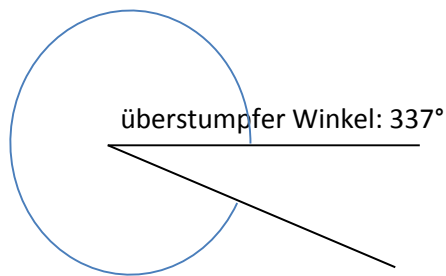
stumpfer Winkel: 158°



stumpfer Winkel: 174°

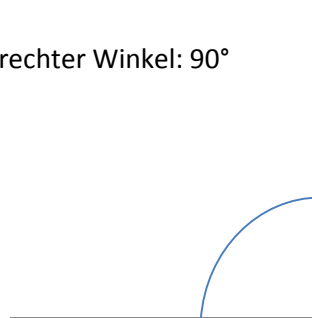


überstumpfer Winkel: 307°



überstumpfer Winkel: 337°

rechter Winkel: 90°



spitzer Winkel: 14°

