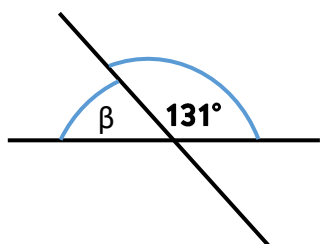


Winkelbetrachtungen 1

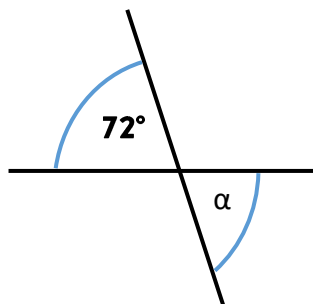
Gib die Größen der bezeichneten Winkel an und begründe deine Entscheidung!

(es gilt: $g \parallel h$)

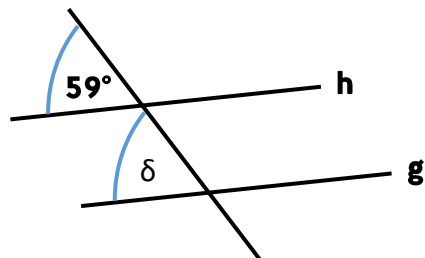
a) _____



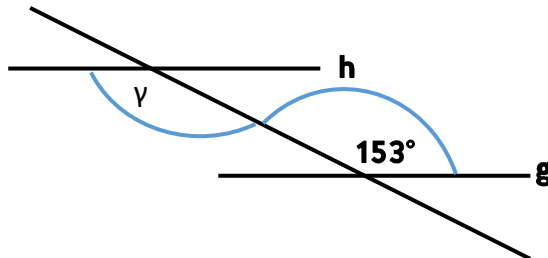
b) _____



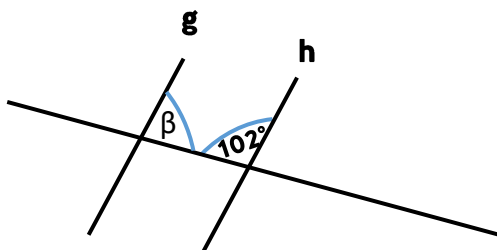
c) _____



d) _____



e) _____



f) _____

